



Legs, Tails and Ears

Noah's Ark Zoo Farm worksheet for KS1/KS2


You will need to find each of these animals at Noah's Ark and count them to answer the questions!



How many rhinos?




How many tamarins?



How many wallabies?



How many Meerkats?



How many llamas?



How many chicks?

How many ears do the rhinos have in total? _____

How many legs have the chicks got altogether? _____

If the llamas and meerkats were in an enclosure together, how many legs would there be in total? _____

How many more ears have the wallabies got than the tamarins? _____

Who has got more tails, the meerkats or the tamarins? _____

In all these animals, how many ears altogether? _____